

**Semester Two Examination, 2011**

**Question/Answer Booklet**

**MATHEMATICS**

**3C/3D**

**Section Two:**

**Calculator-assumed**

Student Name: \_\_\_\_\_

**Time allowed for this section**

Reading time before commencing work: Ten (10) minutes

Working time for this section: One hundred (100) minutes

**Material required/recommended for this section**

*To be provided by the supervisor*

This Question/Answer Booklet

Formula Sheet

*To be provided by the candidate*

Standard items:      pens, pencils, pencil sharpener, eraser, correction fluid, ruler, highlighters

Special items:      drawing instruments, templates, notes on two unfolded sheets of A4 paper, and up to three calculators satisfying the conditions set by the Curriculum Council for this course.

**Important note to candidates**

No other items may be used in this section of the examination. It is **your** responsibility to ensure that you do not have any unauthorised notes or other items of a non-personal nature in the examination room. If you have any unauthorised material with you, hand it to the supervisor **before** reading any further.

**Structure of this paper**

| Section                            | Number of questions available | Number of questions to be answered | Working time (minutes) | Marks available | Percentage of exam |
|------------------------------------|-------------------------------|------------------------------------|------------------------|-----------------|--------------------|
| Section One:<br>Calculator-free    | 8                             | 8                                  | 50                     | 40              | 33 1/3             |
| Section Two:<br>Calculator-assumed | 13                            | 13                                 | 100                    | 80              | 66 2/3             |
|                                    |                               |                                    |                        | 120             | 100                |

**Instructions to candidates**

- The rules for the conduct of Western Australian external examinations are detailed in the *Year 12 Information Handbook 2011*. Sitting this examination implies that you agree to abide by these rules.
- Write your answers in the spaces provided in this Question/Answer Booklet. Spare pages are included at the end of this booklet. They can be used for planning your responses and/or as additional space if required to continue an answer.
  - Planning: If you use the spare pages for planning, indicate this clearly at the top of the page.
  - Continuing an answer: If you need to use the space to continue an answer, indicate in the original answer space where the answer is continued, i.e. give the page number. Fill in the number of the question(s) that you are continuing to answer at the top of the page.
- Show all your working clearly.** Your working should be in sufficient detail to allow your answers to be checked readily and for marks to be awarded for reasoning. Incorrect answers given without supporting reasoning cannot be allocated any marks. For any question or part question worth more than two marks, valid working or justification is required to receive full marks. If you repeat an answer to any question, ensure that you cancel the answer you do not wish to have marked.
- It is recommended that you **do not use pencil** except in diagrams.

**This page is intentionally blank**

This section has **thirteen (13)** questions. Answer **all** questions. Write your answers in the space provided.

Spare pages are included at the end of this booklet. They can be used for planning your responses and/or as additional space if required to continue an answer.

- Planning: If you use the spare pages for planning, indicate this clearly at the top of the page.
- Continuing an answer: If you need to use the space to continue an answer, indicate in the original answer space where the answer is continued, i.e. give the page number. Fill in the number of the question(s) that you are continuing to answer at the top of the page.

The working time for this section is 100 minutes.

---

**Question 9**

**(4 marks)**

Entrants in a schools' whitewater race could choose from three types of boats: single kayaks, double kayaks or 3-man canoes.

(A single kayak has one person in it and a double kayak has 2 occupants.)

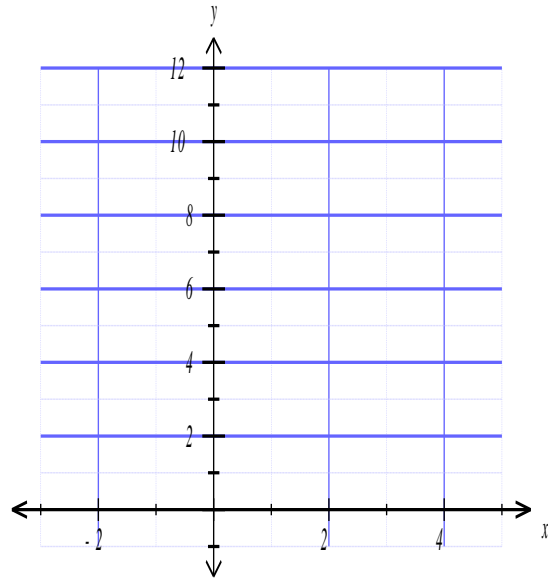
Entry fees were calculated at \$5 per boat and \$2 per person, to a maximum of \$10 per boat.

Last year, there were 37 boats and 63 people in the race for a total entry fee of \$304.

Set up and solve a system of three equations to find the number of each type of boat in the race.

[4]

- (a) Draw the graphs of  
 $y = x^2 - 3x + 3$  and  $y = x + 3$   
in the interval  $-2 \leq x \leq 4$   
on the given axes.



[2]

- (b) Find the area contained between the curve and the line, showing all necessary calculations you use.

[2]

- (c) Find  $\int_{-2}^4 (4x - x^2) dx$  and interpret the result in terms of the graphs drawn above.

[2]

- (d) Determine the volume of revolution when the area bounded by curves in the first quadrant is rotated about the  $x$ -axis

[2]

A computer screen saver program generates a coloured region of random shape and size. This region then expands until it fills the screen. A new region of a different colour is then formed.

The program is written so that the rate at which the area of the region increases is proportional to its current area.

- (a) Write an equation involving  $\frac{dA}{dt}$  and show that  $A = A_0 e^{kt}$  satisfies this equation where  $A_0$  is the initial area of the region in  $\text{cm}^2$  and  $k$  is a constant.

[2]

Given that, once formed, the area of a region increases by 50% in 0.4 seconds

- (b) Show clearly that  $k = 1.014$  correct to 4 significant figures

[2]

A coloured region of area  $3.6 \text{ cm}^2$  is generated on a screen measuring 24cm by 32cm.

- (c) Find, in seconds correct to 1 decimal place, how long it takes for the region to fill the screen.

[2]

The rate of change of the value of the Australian dollar (AUD), measured in terms of the US dollar, at time  $t$  months, has been modelled by economists as  $\frac{dV}{dt} = t(\sqrt{t} - 2)$  for  $t \geq 0$ .

The present value is 94 cents US.

(a) Estimate

(i) The value of the Australian dollar in 3 months

[2]

(ii) The value of the Australian dollar in 8 months

[1]

(b) When does the dollar reach parity? (i.e. \$1 AUD = \$1 US)

[2]



Australian government legislation states that products containing more than 9.5 grams per kg of genetically modified material must be identified as genetically modified.

It has been discovered that a canola crop contains genetically modified canola. The grower needs to know whether or not the crop must be identified as genetically modified.

The crop is divided into sections; these sections, taken collectively, can be considered to be a population.

Tests are undertaken on a randomly chosen sample of fifty sections and  $X$ , the amount of genetically modified canola per kg in each section is measured. The mean amount of genetically modified canola in the fifty sections is 9.21 grams per kg.

- (a) Calculate a 95% confidence interval for the amount of genetically modified canola in the crop. Assume that the population has a standard deviation of 0.74 grams per kg.

[2]

- (b) The grower claims that the crop will not need to be identified as genetically modified. Do you think this claim is justified? Explain.

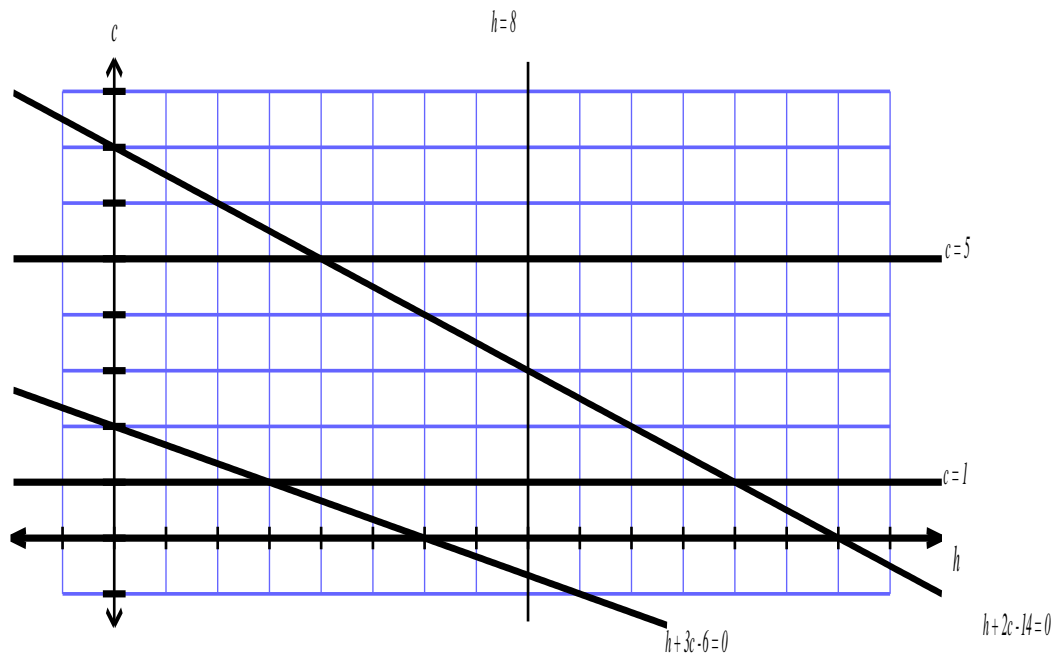
[2]

- (c) How many sections of the crop need to be sampled to obtain a 95% confidence interval with a width of no more than 0.1 grams per kg?

[3]

A dance teacher is writing up a business plan for a dance studio she intends to start. She plans to teach Hip-hop and Contemporary. Each hip-hop class will involve 3 hours of tuition and produce an income of \$60. Each class of contemporary will involve 6 hours of tuition and produce an income of \$180. The teacher plans to work for up to 42 hours a week and would incur fixed costs (rent, power, etc.) of \$360 per week. She plans to teach at least one contemporary class per week but also decides to teach no more than five contemporary classes and no more than eight hip-hop classes per week. The teacher also decides that her return (income – costs) must not be negative or she will not set up the business.

Let  $h$  denote the number of hip-hop classes and  $c$  the number of contemporary classes. The constraints have been drawn on the diagram below.



(a) Shade the feasible region.

[2]

- (b) How many hip-hop and contemporary classes should the dance teacher aim to have pupils for so that she can maximise her weekly profit? Show all working and state clearly your optimal solution and maximum value.

**[3]**

- (c) There are no dance classes in the school holidays and throughout the year some classes may need to be cancelled for other reasons. Consequently the dance teacher realises that if she is considering her average profit over the whole year, the more realistic income from hip-hop classes is \$50 per class. What is the lowest income per contemporary class that the teacher can receive so that the solution from part (b) is the only combination of classes that gives maximum profit per week?

**[3]**

12 magazines appear on one shelf of the newsstand of the airport newsagent. Of these magazines, 6 are printed monthly, 4 are printed fortnightly and 2 are printed weekly.

- (a) In how many ways can the magazines be arranged on the shelf if all the monthly magazines must be kept together

**[3]**

A traveller rushes in to buy some reading material for a flight and randomly chooses 3 magazines. Of the 3 chosen magazines, what is the probability that

- (b) none is a weekly

**[2]**

- (c) at least two are monthly magazines

**[2]**

A pathology service performs blood tests to detect the presence of a certain type of enzyme E. For 4% of blood samples with enzyme E, the test suggests its absence (that is, it tests negative); while for 8% of samples without the enzyme, the test suggests its presence (that is, it tests positive). From past data, it is known that 25% of all samples received have the enzyme. Suppose one of the fresh samples is taken at random and tested for enzyme E.

Calculate the probability that the sample:

(a) tests positive

[3]

(b) contains enzyme E given that the test is positive

[2]

(c) tests positive or has the enzyme in it.

[2]

A student throws ten dice and records the number of sixes showing. The dice are fair, numbered 1 to 6 on the faces.

- (a) Describe the distribution of the number of sixes obtained when ten dice are thrown.

[2]

- (b) Find the mean and standard deviation of the distribution.

[2]

The student throws the ten dice 100 times, recording the number of sixes showing each time and then calculating the mean number of sixes.

- (c) Describe, and justify, the distribution of these mean number of sixes

[2]

(d) Find the probability that the mean number of sixes is more than 1.8

[2]

**Question 18**

**(4 marks)**

The time  $T$  a planet takes to revolve about the Sun and the average distance  $r$  from the planet to the sun are related by the equation  $T = k r^{\frac{3}{2}}$

If the Earth's distance from the Sun were increased by 1%, use an incremental technique to determine how much longer a year would become?

Justify your answer, giving your solution in days to 2 decimal places.

[4]

Take a 2-digit integer, multiply the units digit by 4 and then add the 10s digit to produce another 2-digit integer. For example,

$$23 \quad \rightarrow \quad (3 \times 4) + 2 = 14$$

$$15 \quad \rightarrow \quad (5 \times 4) + 1 = 21$$

Some integers reproduce themselves:

$$13 \quad \rightarrow \quad (3 \times 4) + 1 = 13$$

- (a) Write down an algebraic expression for the result of applying this process to a 2-digit number  $ab$ .

[1]

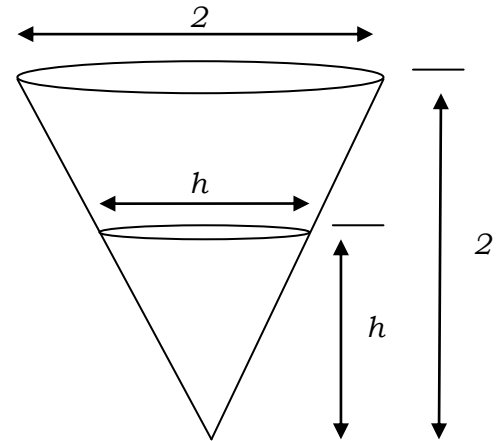
- (b) Noting that  $ab$  has a numerical value  $10a + b$ , show clearly that there are only two other 2-digit integers that reproduce themselves in this way.

[3]



A container in the shape of a right circular cone with both height and diameter 2 metres (as shown in the diagram) is being filled with water at a rate of  $\pi \text{ m}^3/\text{minute}$

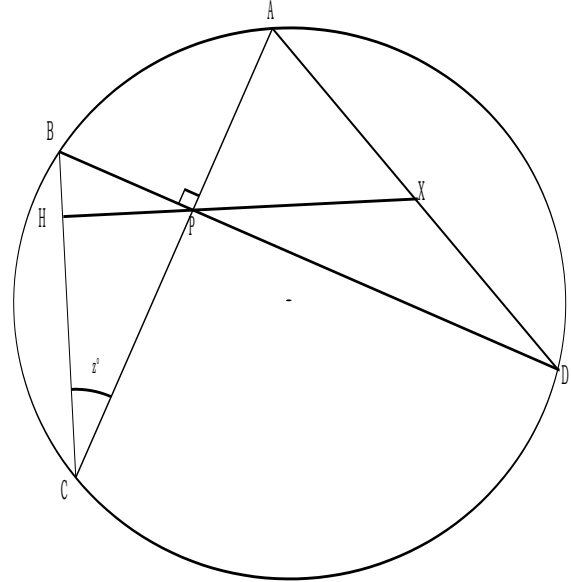
Find the rate of change of height  $h$  of the water when the container is one-eighth full (by volume).



The diagram below shows a circle with perpendicular chords  $AC$  and  $BD$  meeting at point  $P$ .  
 Line segment  $HP$  is perpendicular to  $BC$  and  $\angle BCA = z^\circ$ .

$HP$  is extended to meet  $AD$  at point  $X$ .

- (a) Show  $\angle DPX = \angle BCA$



[3]

- (b) Hence, or otherwise, show that triangle  $PAX$  is isosceles

[2]

- (c) Hence show that  $X$  is the midpoint of  $AD$

[2]

Question number(s): \_\_\_\_\_

**SEMESTER TWO EXAMINATION      20**  
**SECTION TWO**  
**Additional working space**

**MATHEMATICS 3C/3D**  
**CALCULATOR ASSUMED**

Question number(s): \_\_\_\_\_

**See next page**

**Additional working space**

Question number(s): \_\_\_\_\_